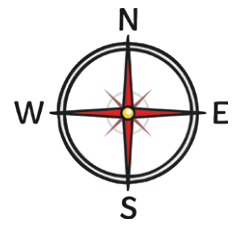



Landforms Map



Key

-  mountain
-  cave
-  canyon
-  island
-  hill
-  volcano



Write the location of each item:

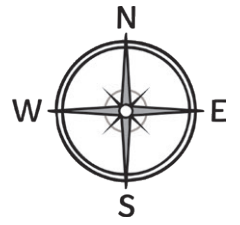
mountains		island	
cave		hill	
canyon		volcano	

Write the direction of each location. (North, South, East, West)







You are at the hill. You want to go to the mountain. Which direction should you go?


You are at the cave. You want to go to the island. Which direction should you go?

Landforms Map Answers



Key

-  mountain
-  cave
-  canyon
-  island
-  hill
-  volcano



Write the location of each item:

mountains	C, 4	island	E, 3
cave	B, 3	hill	C, 2
canyon	A, 1	volcano	A, 5

Write the direction of each location. (North, South, East, West)

You are at the hill. You want to go to the mountain. Which direction should you go?

North

You are at the cave. You want to go to the island. Which direction should you go?

East